

**Various Non-Gazetted Posts Limited Recruitment / General Recruitment-**  
**Notification No.15/2019- Revised Key for the posts of Common Subject for**  
**TECHNICAL ASSISTANT (GEOPHYSICS) IN A.P.GROUND WATER SUB-SERVICE**  
**TECHNICAL ASSISTANT IN A.P. MINES AND GEOLOGY SUBORDINATE SERVICE**  
**DEPUTY INSPECTOR OF SURVEY IN A.P. SURVEY AND LAND RECORDS SUB- SERVICE**  
**TECHNICAL ASSISTANTS IN A.P. ARCHAEOLOGY & MUSEUM SUB-SERVICE**

Subject: **General Studies and Mental Ability**

**Question Paper Name : General Studies and Mental Ability DG**

**Subject Name : General Studies and Mental Ability**

**Creation Date : 2020-09-27 12:39:20**

Question Number : 79 Question Id : 2021941429 Question Type : MCQ Option Shuffling : Yes Display Question Number : Yes Is Question Mandatory : No Single Line Question Option : No Negative Marks Display Text : 1/3 Option Orientation : Vertical Correct Marks : 1 Wrong Marks : 0.33

Who was the first Governor General of independent India?

**Answer:**

2. Lord Mountbatten

Question Number : 90 Question Id : 2021941440 Question Type : MCQ Option Shuffling : Yes Display Question Number : Yes Is Question Mandatory : No Single Line Question Option : No Negative Marks Display Text : 1/3 Option Orientation : Vertical Correct Marks : 1 Wrong Marks : 0.33

The total revenue receipt of Andhra Pradesh in Financial year 2018-19 was:

**Answer: DELETED**

Question Number : 109 Question Id : 2021941459 Question Type : MCQ Option Shuffling : Yes Display Question Number : Yes Is Question Mandatory : No Single Line Question Option : No Negative Marks Display Text : 1/3 Option Orientation : Vertical Correct Marks : 1 Wrong Marks : 0.33

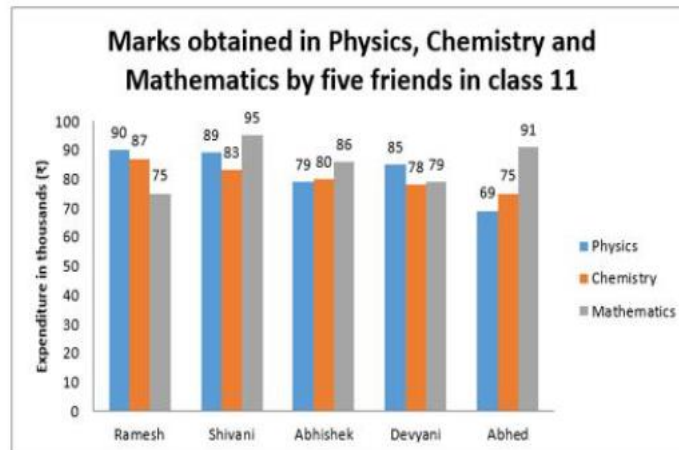
There are \_\_\_\_\_ revenue divisions in Telangana.

**Answer: DELETED**

Question Number : 122 Question Id : 2021941472 Question Type : MCQ Option Shuffling : Yes Display Question Number : Yes Is Question Mandatory : No Single Line Question Option : No Negative Marks Display Text : 1/3 Option Orientation : Vertical Correct Marks : 1 Wrong Marks : 0.33

Study the given graph carefully and answer the following questions on its basis.

The graph shows the marks obtained by five friends in three subjects.



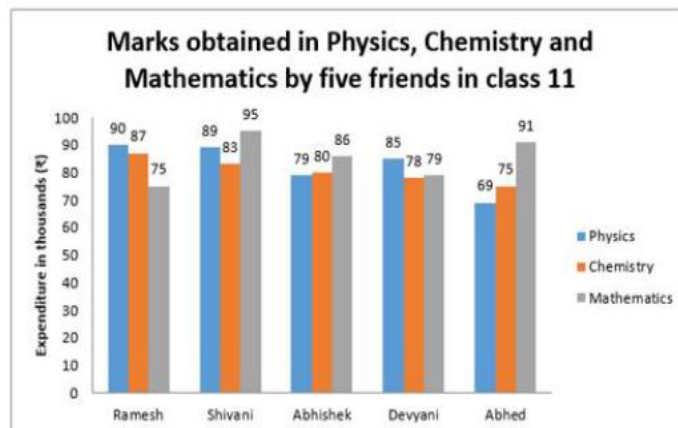
What is the ratio of total marks obtained in physics and total marks obtained in chemistry by all the five friends?

**Answer: DELETED**

Question Number : 123 Question Id : 2021941473 Question Type : MCQ Option Shuffling : Yes Display Question Number : Yes Is Question Mandatory : No Single Line Question Option : No Negative Marks Display Text : 1/3 Option Orientation : Vertical Correct Marks : 1 Wrong Marks : 0.33

Study the given graph carefully and answer the following questions on its basis.

The graph shows the marks obtained by five friends in three subjects.



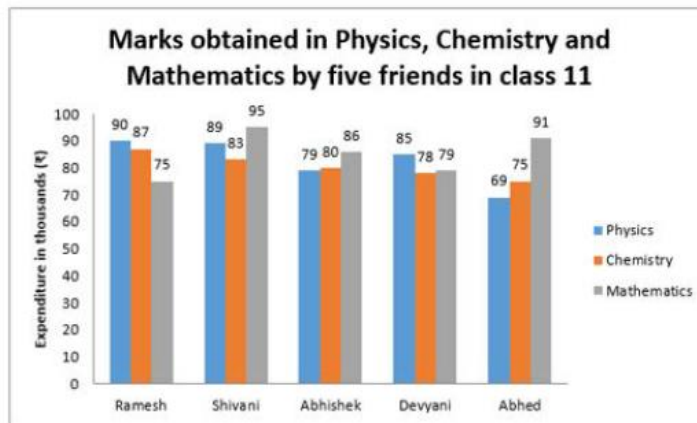
By what percent total marks obtained by Ramesh, Abhishek and Abhed in chemistry is greater than the total marks obtained by Shivani and Devyani in chemistry?

**Answer: DELETED**

Question Number : 124 Question Id : 2021941474 Question Type : MCQ Option Shuffling : Yes Display Question Number : Yes Question Mandatory : No Single Line Question Option : No Negative Marks Display Text : 1/3 Option Orientation : Vertical Correct Marks : 1 Wrong Marks : 0.33

Study the given graph carefully and answer the following questions on its basis.

The graph shows the marks obtained by five friends in three subjects.



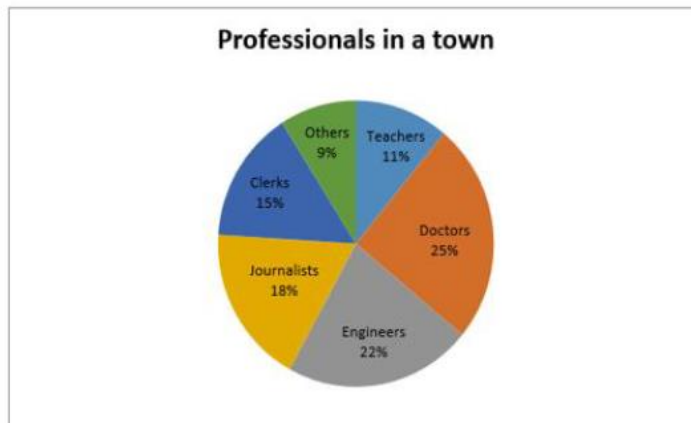
On the basis of total marks obtained in physics, chemistry and mathematics together, who is on the third position?

**Answer: DELETED**

Question Number : 127 Question Id : 2021941477 Question Type : MCQ Option Shuffling : Yes Display Question Number : Yes Is Question Mandatory : No Single Line Question Option : No Negative Marks Display Text : 1/3 Option Orientation : Vertical Correct Marks : 1 Wrong Marks : 0.33

Study the following Pie-chart carefully and answer the given questions.

The Pie-chart given here represents the percentage of professionals in different professions in a town.



If 46% of teachers are male, then what is the number of female teachers in the town?

**Answer: DELETED**